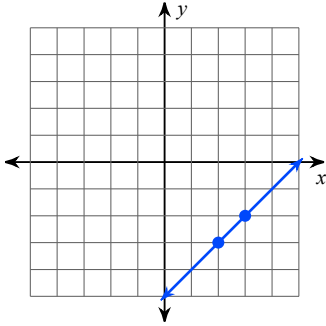


Assignment

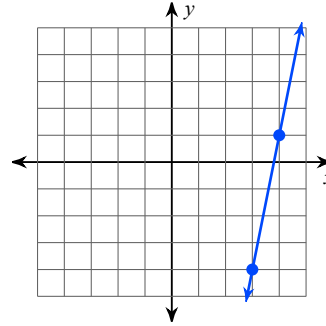
Date _____ Period _____

Find the slope of each line.

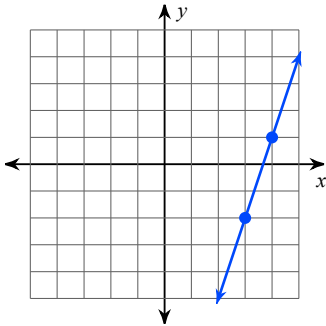
1)



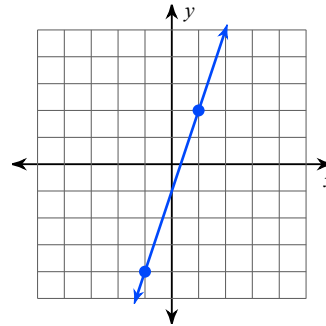
2)



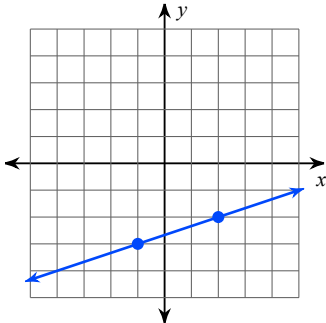
3)



4)



5)

**Find the slope of the line through each pair of points.**

6) $(-13, -12), (19, 17)$

7) $(10, 13), (1, 10)$

8) $(12, 2), (2, 5)$

9) $(-3, 18), (-20, -17)$

10) $(7, 6), (1, 10)$

Find the slope of each line.

11) $y = -4$

12) $y = x + 2$

13) $y = 1$

14) $y = -\frac{3}{2}x - 1$

15) $y = -\frac{2}{3}x - 2$